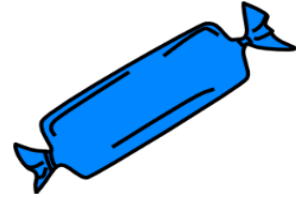


Grade 2 Multiplication and Division Word Problems

Name: _____ Class: _____

Question 1

5 boys share 35 candies equally.
How many candies does each boy get?

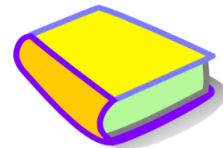


Question 2

24 children are put into equal groups. There are 4 children in each group.
How many equal groups are there?

Question 3

Mandy put 24 books in 3 equal groups.
How many books did she put in each group?



Question 4

A hamburger costs 2 dollars. Miss Jones has 20 dollars.
How many hamburgers can she buy?

Question 5

Jenny bought 8 t-shirts. Each t-shirt cost 5 dollars.
How much money did she spend?

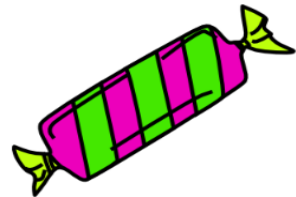


Question 6

There are 5 fingers on each hand. How many fingers do 3 boys have?

Question 7

5 girls share 40 candies equally.
How many candies does each girl get?



Question 8

Jacob drinks 3 liters of water each day? How much water does he drink in 2 weeks?

Question 9

A full can of Coca-Cola has a volume of 330 milliliters. What is the volume of 2 full cans of Coca-Cola?




Question 10

There are 9 fish in each fish tank.
How many fish are there in 7 fish tanks?

Question 11

Yesterday I was hungry and bought 8 hamburgers.
The price of 1 hamburger was 2 dollars.
How much money did I spend?



Question 12

There are 4 eggs on each plate.
How many eggs are there on 7 plates?

Answers

Q 1 : 7 candies

Q 7 : 8 candies

Q 2 : 6 groups

Q 8 : 42 liters

Q 3 : 8 books

Q 9 : 660 milliliters

Q 4 : 10 hamburgers

Q 10 : 63 fish

Q 5 : 40 dollars

Q 11 : 16 dollars

Q 6 : 30 fingers

Q 12 : 28 eggs